

Reg. No.

--	--	--	--	--	--	--	--	--	--	--	--	--	--	--	--	--	--	--	--

Question Paper Code : 51446

B.E./B. Tech. DEGREE EXAMINATION, MAY/JUNE 2016

Third Semester

Electronics and Communication Engineering

EC 2205/EC 36/080290011 – ELECTRONIC CIRCUITS – I

(Common to Medical Electronics Engineering)

(Regulations 2008)

Time : Three Hours

Maximum : 100 Marks

Answer ALL questions.

PART – A (10 × 2 = 20 Marks)

1. List out the advantages of self bias over other BJT biasing methods.
2. Draw the DC load line of the circuit shown in Figure-2.

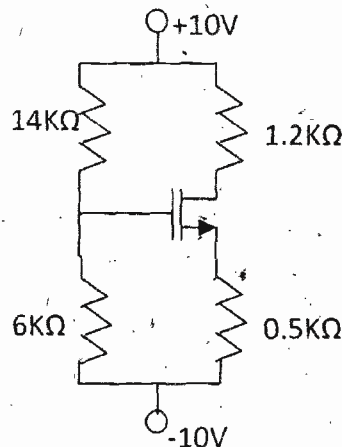


Figure-2

3. Define Miller's theorem.
4. Define CMRR. How to improve CMRR ?
5. Differentiate between Class A and Class S amplifier.
6. Define cross-over distortion. How to overcome cross-over distortion ?
7. Determine f_{3B} of the short-circuit current gain of BJT, $r_{be} = 2.6k\Omega$, $C_{be} = 2pF$ and $C_{bc} = 0.1pF$.
8. Differentiate between half-wave-rectifier and full-wave-rectifier.
9. Define gain-bandwidth product.
10. Compare between LC and π filter.

PART - B (5 × 16 = 80 Marks)

11. (a) (i) Determine the quiescent current and voltage values in a p-channel JFET circuit. (6)

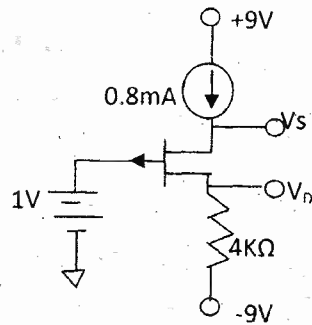


Figure - 11(a) (i)

- (ii) For the MOSFET transistor in the circuit in Figure 11(a) (ii), the parameters are $V_{tn} = 2V$, $kn' = 60\mu A/V^2$ and $W/L=60$. (1) Determine V_{GS} , I_D and V_{DS} . (2) Draw the DC load line. (10)

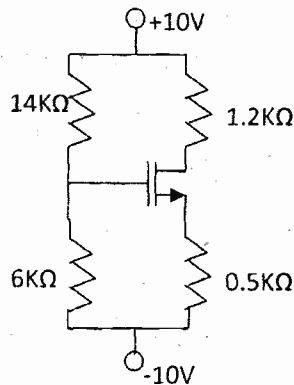


Figure - 11(a) (ii)

OR

- (b) (i) Derive an expression for the stability factor of a self-bias circuit. (6)
 (ii) The circuit in Figure 11(b) (ii), let $\beta = 100$ (1) Find V_{TH} and R_{TH} for the base circuit (2) Determine I_{CQ} and V_{CEQ} (3) Draw the DC load line. (10)

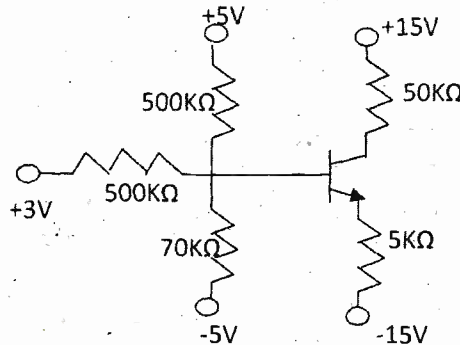


Figure 11(b) (ii)

12. (a) (i) For each transistor in the Darlington circuit shown in Figure 12(a) (i) has the parameters of $\beta = 100$, $V_A = \infty$. Determine its overall voltage gain, input impedance and output impedance. (8)

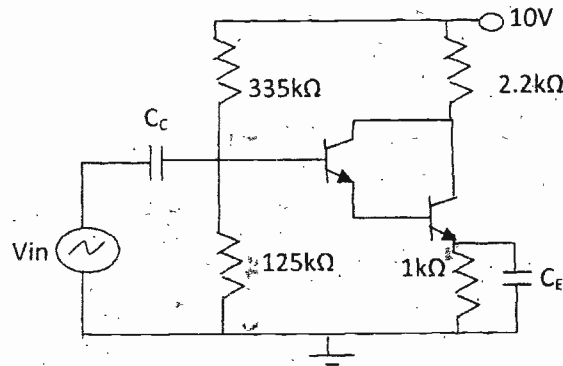


Figure - 12(a) (i)

- (ii) Determine the small signal voltage gain, input impedance and output impedance of common source FET amplifier. (8)

OR

- (b) For the circuit in Figure 12(b), the parameters are $R_B = 100 \text{ k}\Omega$, $R_E = 10 \text{ k}\Omega$, $R_C = 10 \text{ k}\Omega$, $V_{CC} = V_{EE} = 10 \text{ V}$, $R_L = 1 \text{ k}\Omega$, $R_S = 1 \text{ k}\Omega$, $\beta = 125$ and $V_A = \infty$. (1) Determine the small signal voltage gain (2) Determine small signal current gain (3) Determine the input resistance, f_{in} (4) Determine the output resistance, R_o . (16)

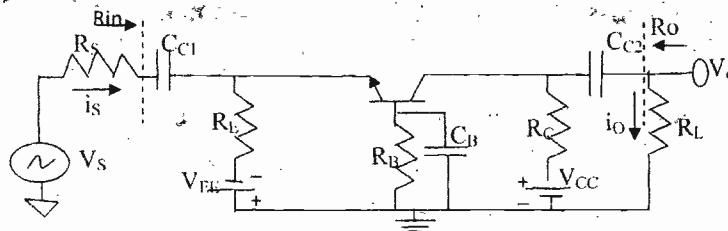


Figure - 12(b)

13. (a) (i) Discuss the frequency response of multistage amplifier in detail. (8)
 (ii) Determine the midband gain, upper Cutoff frequency of a Common-Source amplifier fed with the signal having internal resistance $R_{sig} = 100 \text{ k}\Omega$ (vide Figure 13(a) (ii)). The amplifier has $R_G = 4.7 \text{ M}\Omega$, $R_D = R_L = 15 \text{ k}\Omega$, $g_m = 1 \text{ m A/V}$, $r_o = 150 \Omega$, $C_{gs} = 1 \text{ pF}$ and $C_{gd} = 0.4 \text{ pF}$. (8)

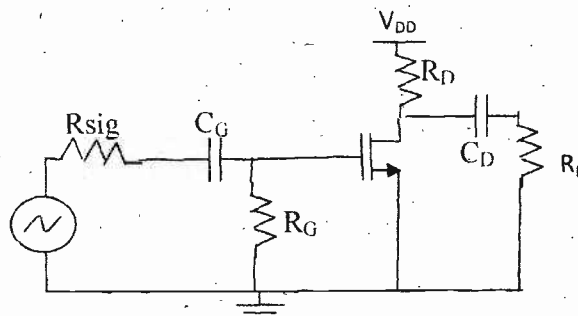


Figure - 13(a) (ii)

OR

- (b) Determine the mid-band gain and bandwidth of a CE amplifier, (vide Figure 13(b)). Assume lower cutoff frequency is 100 Hz, (ii) Find C_{C1} , C_{C2} and C_E . Let $\beta = 100$, $c_{bc} = 4\text{pF}$, $c_{bc} = 0.2\text{pF}$ and $V_A = \infty$. (16)

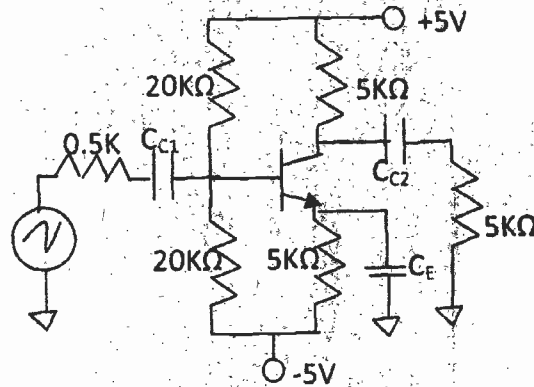


Figure - 13(b)

14. (a) (i) Explain the second-order harmonic distortion in detail. (8)
 (ii) Explain the Class D amplifier in detail. (8)

OR

- (b) (i) Briefly discuss the complementary symmetry (Class-B) push-pull amplifier. (8)
 (ii) Discuss the thermal stability and heat sinks in detail. (8)
15. (a) Explain the Switched-Mode power supply design in detail. (16)

OR

- (b) (i) Explain the AC power control using SCR in detail. (8)
 (ii) Explain the performances measures of rectifiers in detail. (8)